

I CAN identify and correctly use circle segment rules to solve.

Review 10c Strand

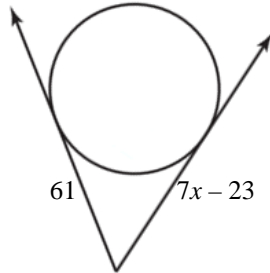
Geometry

Show ALL work to receive full credit

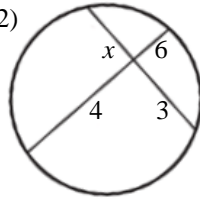
Make sure to label answers

Find the variable(s). Leave your answers in exact form.

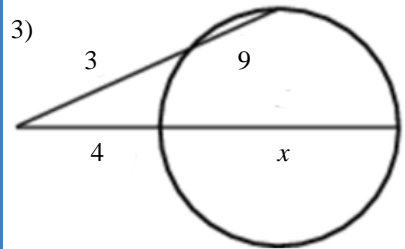
1)



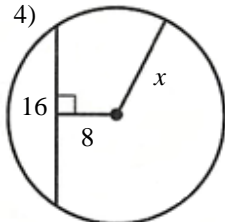
2)



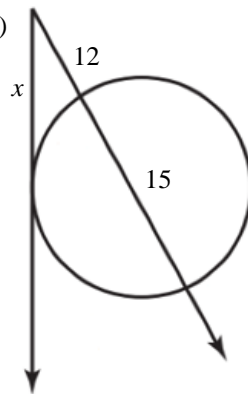
3)



4)



5)



6)

